

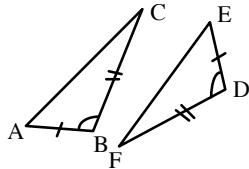
Geometry Handout 14.4A

Name _____
Period _____

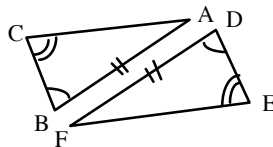
Congruent Triangle Theorems 1

Mark each figure with any inherent information (vertical or reflexive). Identify the **Triangle congruence Theorem** represented in each figure. If the triangles **ARE** congruent, write a **congruence correspondence** statement for them.

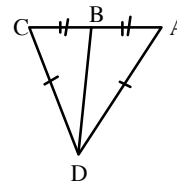
1.



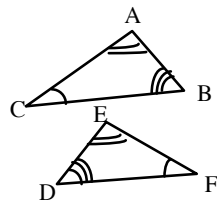
2.



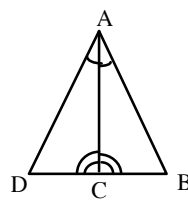
3.



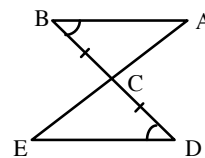
4.



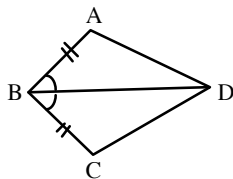
5.



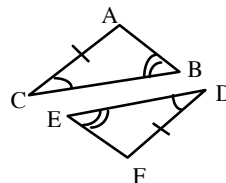
6.



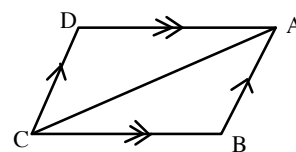
7.



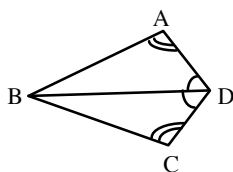
8.



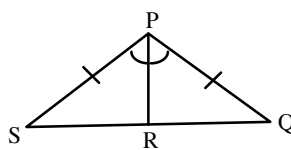
9.



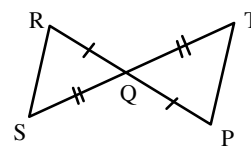
10.



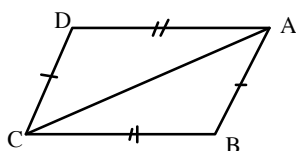
11.



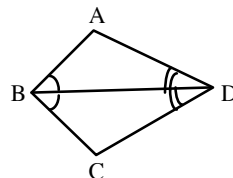
12.



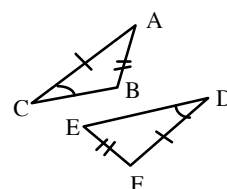
13.



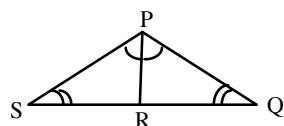
14.



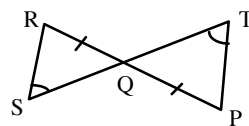
15.



16.



17.



18.

